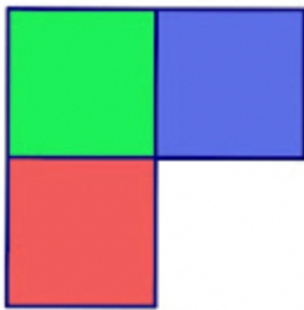


★ PUZZLE OF THE WEEK ★

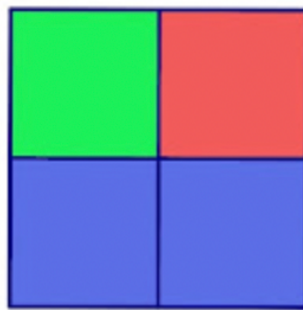
SOLUTION

The Colour Blocks Problem:

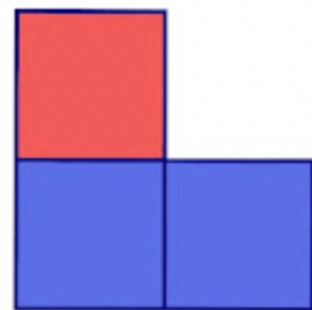
Three views of a stack of coloured, cube-shaped blocks are shown above. How many blocks of each colour are there? How are the blocks stacked together?



TOP

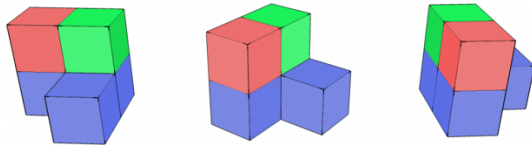


SIDE



FRONT

There are three blue cubes, 1 green cube, and 1 red cube.



Be sure to check the next newsletter to see the solution! If you have questions about or suggestions for the puzzle of the week, let Ms. Rush know!

Special thanks to www.1001mathproblems.com for the puzzle